


1 Find the missing card:



B

Every shape has the 8 and 9 number except ♣ which has only 9, so the missing is 8♣



2 Which statement best explains the following quotation:

"A cynic is a man who knows the price of everything but the value of nothing."
- Oscar Wilde

- A A cynic is altruistic in his/her actions towards others.
- B A cynic is too pessimistic to appreciate the non-material value of things.
- C A cynic fails to consider the good in people.
- D A cynic cares only about profit.

B

3 Four mice are racing each other for a piece of cheese.

The red mouse overtook the green mouse.

The blue mouse was outrun by the green mouse.

The yellow mouse came in after the red mouse.



Which mouse got the cheese?

- A The green mouse.
- B The blue mouse.
- C The yellow mouse.
- D The red mouse.

D

4 Which statement best explains the following...

4 Which statement best explains the following quotation:

"Pleasure can be supported by an illusion; but happiness rests upon truth."

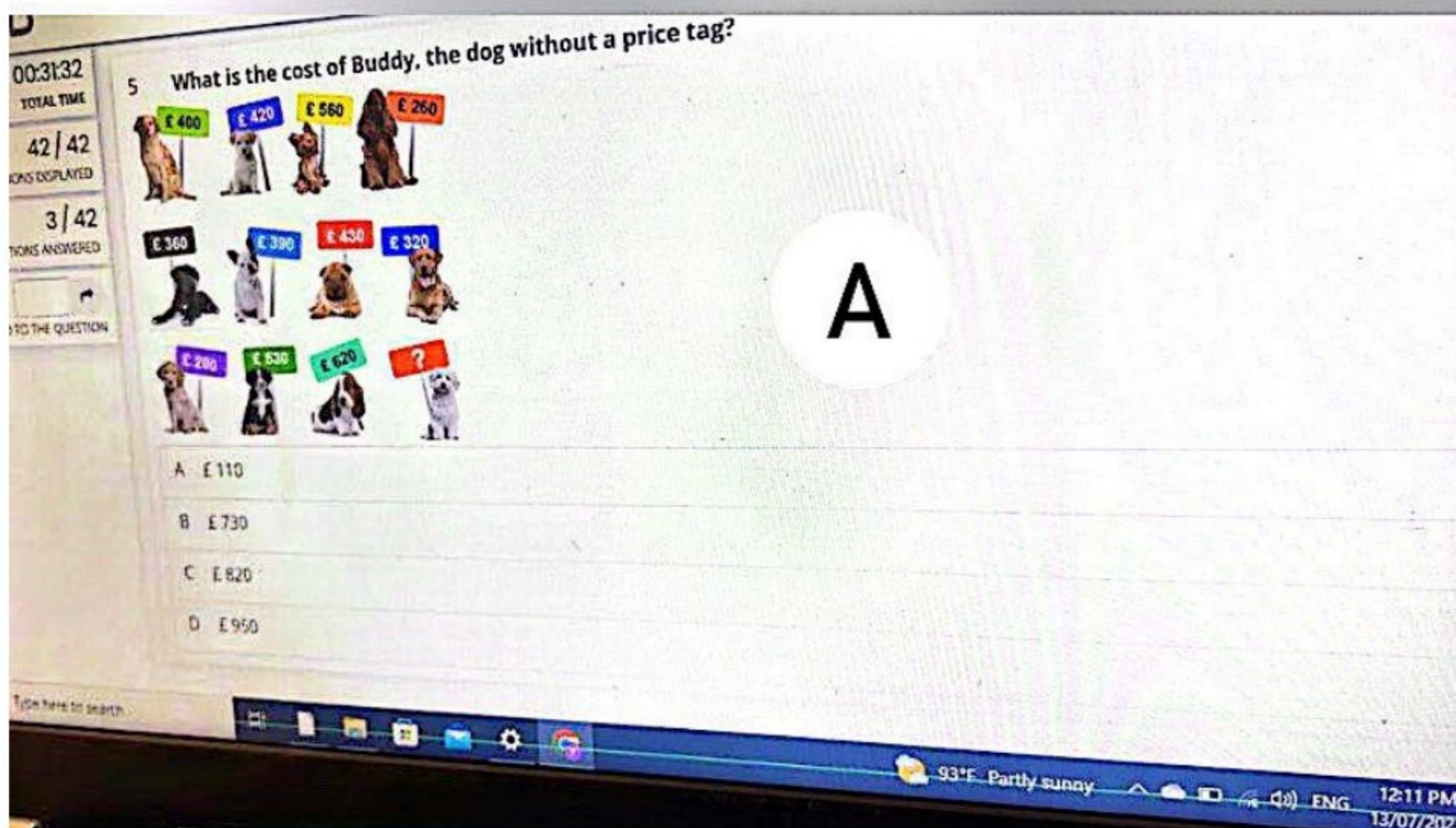
- Chamfort

- A The illusion of pleasure is less important than real happiness.
- B The reality of happiness depends on the rejection of the illusion of pleasure.
- C Illusion can lead to pleasure, but only reality leads to happiness.
- D The pleasure of an imaginary happiness is less important than the reality of the illusion of pleasure.
- E You can think you are looking for happiness but only reality can lead to pleasure.

C

5 What is the cost of Buddy, the dog without a price tag?

- £ 400
- £ 420
- £ 560
- £ 260



$$400 + 420 - 560 = 260$$

Therefore:

$$200 + 530 - 620 = 110$$

6 John is exactly half his mother's age. The total of their ages is 60. When John reaches his mother's current age, she will be 60 years old. How old is John now?

A 15 years

B 20 years

C 30 years

D 40 years

B


**John is 20 & his mother is
40**

7 Identify two words from the options below that are closest in meaning to: "Delude"

- A Deceive Deceive ✓
- B Aggravate Aggravate
- C Complicate Complicate ✓
- D Bore Bore

Delude

8 Find the missing figure:



B

9 Choose the word that does not match the others:

A Ferry Ferry

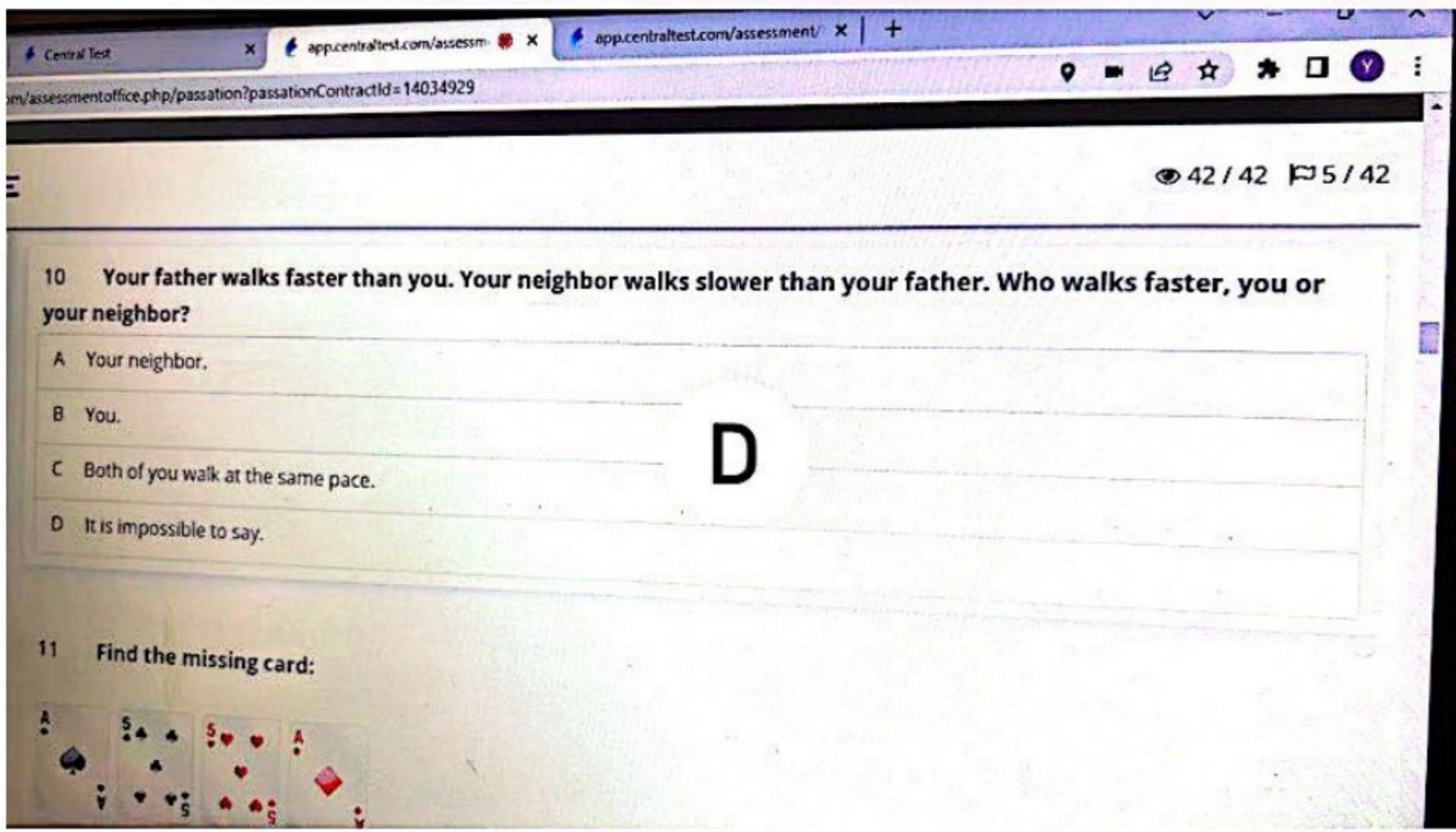
B Battle Battle

C Cigar Cigar ✓

D Pizza Pizza

E Fellow Fellow

The answer could be C because Cigar is the only word that hasn't double letters



42 / 42 7 / 42













28:13
TOTAL TIME

12 / 42
DISPLAYED





7 / 42
ANSWERED

QUESTION

11 Find the missing card:

D

A 	B 	C 	D 
---	---	---	--

search 93°F Partly sunny 12:14 PM 13/07/2023

The sum of each row equals 12.

12)

Complete the following series:

3 - 7 - 19 - 55 - ? - 487

$$\begin{array}{ccccccccc} 3. & 7. & 19. & 55. & ? & 487 \\ + & = & + & = & & \\ 4. & 12. & 36. & & & \end{array}$$

A 112

B 156

C 161

D 163

E 172

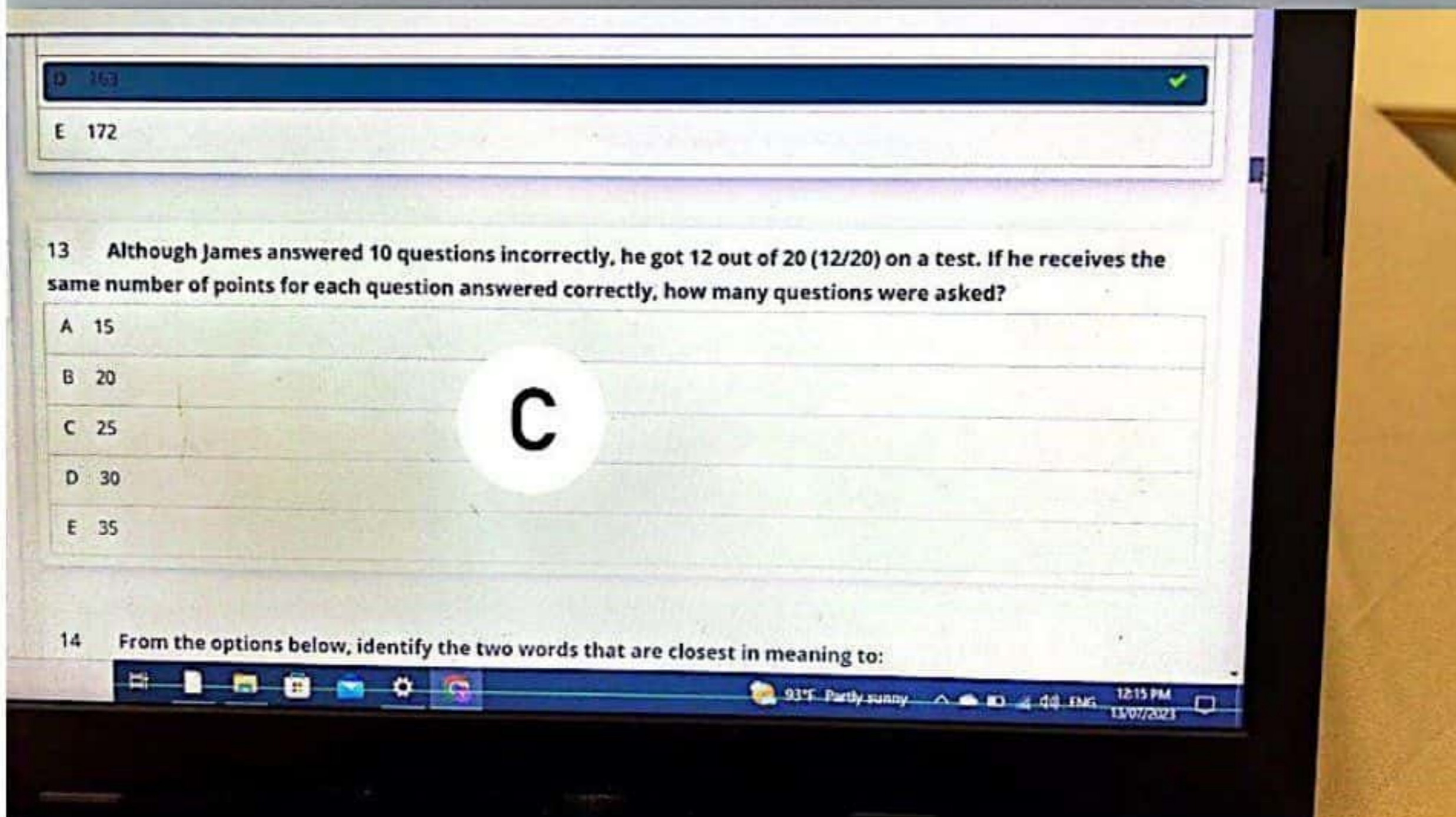
the relationship between the blue numbers is that
the next is multiple of previous by 3:

$$4 \times 3 = 12, 12 \times 3 = 36$$

$$\text{therefore, } 36 \times 3 = 108$$

$$? = 55 + 108 = 163$$





$$12/20 = 0.6$$

This means he got 60% correct and 40% incorrect.

If 10 questions represents 40%

Therefore,

10. 40%

? 60%

$$\begin{aligned} \text{Thus, } ? &= 10 \times 60 \div 40 \\ &= 15 \end{aligned}$$

The total number of questions is

$$10 + 15 = 25$$

14 From the options below, identify the two words that are closest in

"Allocate"

(Note: In order to obtain full points, you need to select two words)

A Assign

A

B Attribute

C Bargain

B


D Take

E Sell




15 Which of the two statements best explains the following quotation:
(Note: In order to obtain full points, you need to select two statements)

"The grass is always greener on the other side."


- A You should always look for something better.
- B We always envy what others have, without learning to appreciate what we have. ✓
- C We think we can find better things elsewhere. ✓
- D What you have is best.
- E It is normal to prefer what you have to what you don't have. 

00:24:16
TOTAL TIME
42 / 42
QUESTIONS DISPLAYED
10 / 42
QUESTIONS ANSWERED
THE QUESTION

16)



C



♥ Even
♦ Odd

17 Choose the balloon that does not match the others:



- A Purple balloon - PEOPLE
- B Yellow balloon - YOUNG
- C Red balloon - RENTED
- D Green balloon - GROWN
- E Blue balloon - BONFIRE



18 At the end of a table tennis tournament, you are declared both the 10th best player and the 10th worst player...

How many participants took part in the tournament?

- A 18
- B 19
- C 20
- D 21

B

19 Identify the pattern in this sequence and pick the last word to complete it:

bean, salad, radish, cabbage, cucumber, ?

في نهاية بطولة تنس الطاولة، تم إعلانك في المرتبة العاشرة بين أفضل لاعب لذلك، هناك 9 لاعبين أفضل منك.

أيضا، تم إعلانك أسوأ لاعب عاشر لذلك، هناك 9 لاعبين أسوأ منك

لذا، العدد الإجمالي للاعبين = 9 أفضل لاعبين + 9 أسوأ اللاعبين + أنت

إجمالي عدد اللاعبين الذين شاركوا في بطولة تنس الطاولة = 9 + 9 + 1

إجمالي عدد اللاعبين الذين شاركوا في بطولة تنس الطاولة = 19

19 Identify the pattern in this sequence and pick the last word to complete it:

bean, salad, radish, cabbage, cucumber, ?

A potato

B asparagus

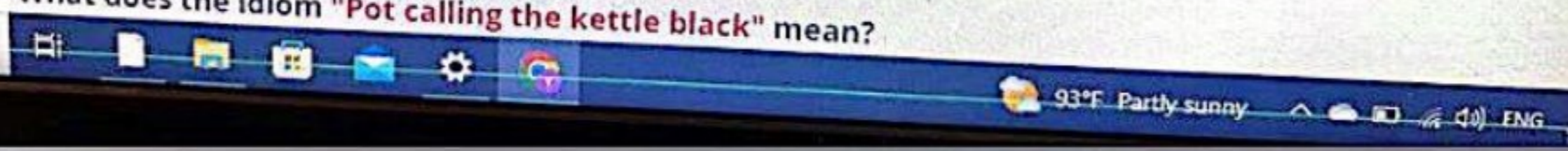
C carrot

D turnip

E parsley

C

20 What does the idiom "Pot calling the kettle black" mean?




E parsley

20 What does the idiom "Pot calling the kettle black" mean?

- A Pot is more useful than a kettle.
- B Someone refusing to help someone in distress.
- C A person criticizing a more qualified person than he or she.
- D A person criticizing of another of equal status/caliber.
- E You can get yourself dirty by dealing with shady people.

D

21 Choose the word that does not match the others:



93°F Partly sunny 12:13
1370 ENG

21 Choose the word that does not match the others:

CHERRY, POTATO, BANANA, TOMATO, PEANUT

A CHERRY

B POTATO

C BANANA

D TOMATO

E PEANUT

E

22 Which 3 numbers should fill in the empty boxes in the third puzzle?

42

RED

ON

22 Which 3 numbers should fill in the empty boxes in the third puzzle?

28	4	6	Orange	51	13	71	Blue	8	96	30	Orange
5	67	3	Blue	17	51	3	Blue	41	55	37	Blue
9	81	11	Blue	19	93	5	Blue				Orange
86	62	4	Orange	12	6	24	Orange	28	48	72	Orange

A 43, 15, 53

B 3, 18, 94

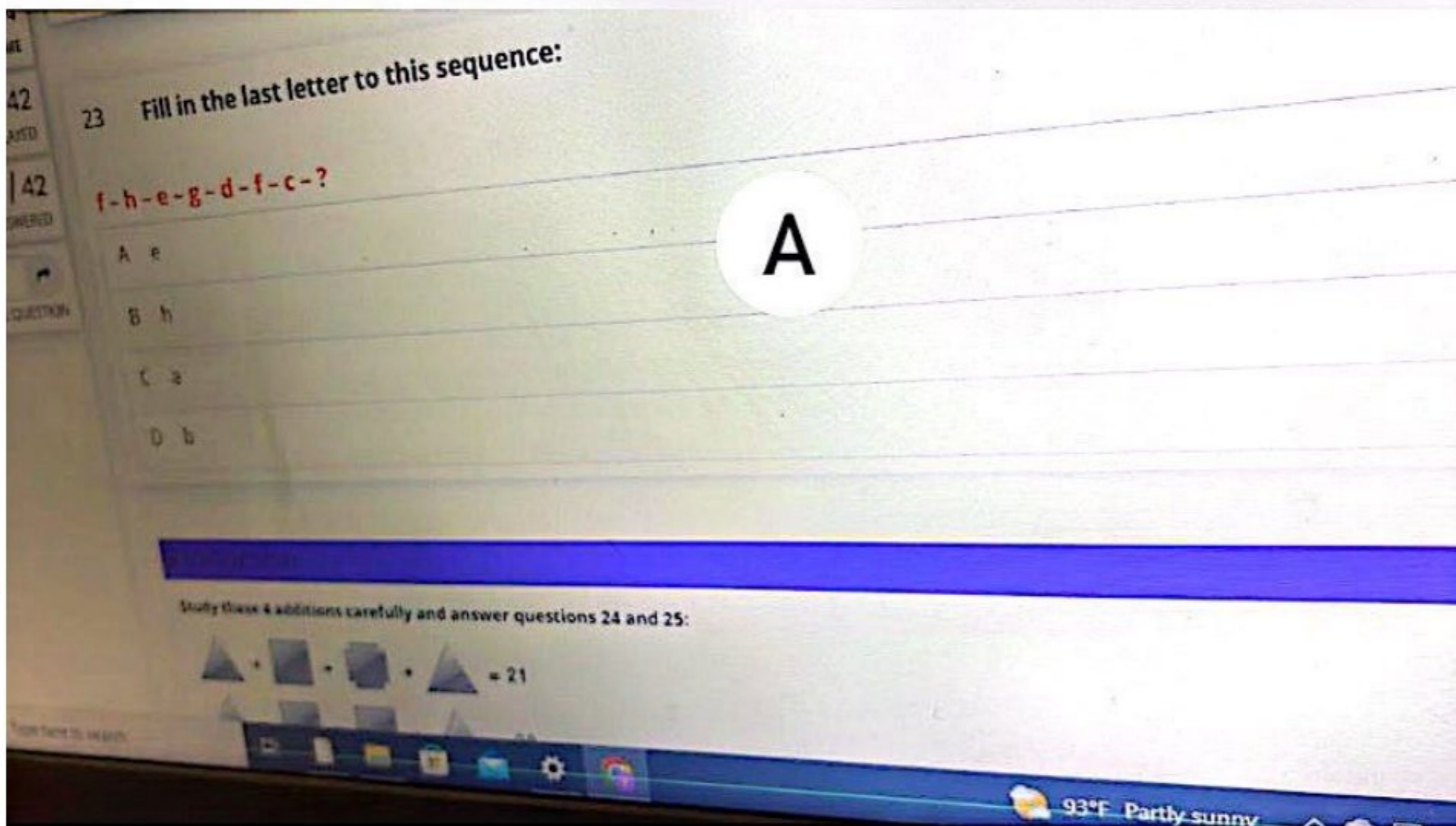
C 37, 59, 1

D 12, 28, 46

E 8, 64, 31

D

Blue box for Odd numbers.
Orange box for Even numbers.



f-h-e-g-d-f-c-?
6-8-5-7-4-6-3-?
?
?=5 & 5=e

58
TIME
/ 42
PLAYED
0 / 42
ANSWERED
QUESTION

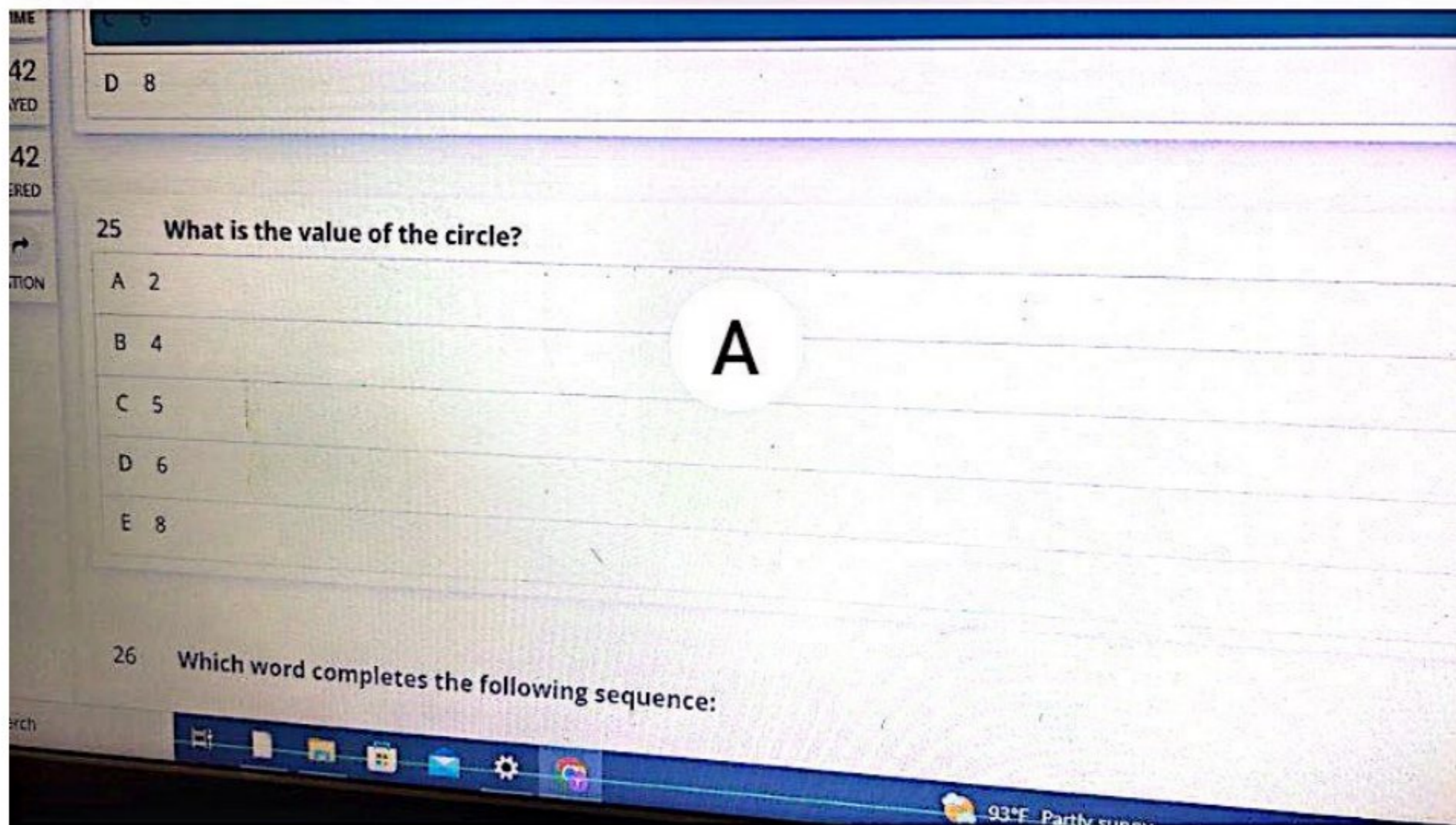
Study these 4 additions carefully and answer questions 24 and 25:

$$\begin{aligned} \triangle + \square + \square + \triangle &= 21 \\ \triangle + \square + \square + \triangle &= 20 \\ \square + \square + \square + \square &= 16 \\ \circ + \square + \triangle + \square &= 18 \end{aligned}$$

C

24 What is the value of the triangle?

- A 2
- B 4
- C 6
- D 8



26 Which word completes the following sequence:

FOE - LOVE - HORNET - ? - OCTAVE - SOLVABLE

- A MOBILE
- B REPROVE
- C ZOO
- D ROOTS
- E MELODRAMA

B

The number of letters between O & E increase by 1 in each word.

27 Complete the series:

2-3-E-6-2-H-3-6-I-4-?-L

A 8

B 9

C 11

D 12

E 14

A

$2+3=5$ & $5=E$
 $6+2=8$ & $8=H$
 $3+6=9$ & $9=I$
 $4+8=12$ & $12=L$

28 Caesar, in trying to reach Rome as quickly as possible crossed the river Rubicon, calling out "The die is cast". The Roman senate had declared that anyone who crossed this river would be declared a traitor.

Now, what does the idiom: "Crossing the Rubicon" mean?

- A Overcoming a difficult task.
- B To be the first to cross the finish line.
- C Completing a task.
- D To get older.
- E Making an irreversible decision.

E

29 Complete the following series:



E Making an irreversible decision.

29 Complete the following series:

0 - 3 - 3 - 6 - 9 - 15 - ? - 39

A 20

B 21

C 22

D 23

E 24

E

$$0 + 3 = 3$$

$$3 + 3 = 6$$

$$3 + 6 = 9$$

$$6 + 9 = 15$$

$$9 + 15 = 24$$

$$15 + 24 =$$

39. Therefore, the missing number in the series is 24.

30 Identify the word closest to:

"Implacable"

- A Inappropriate
- B Incomprehensible
- C Incongruous
- D Inflexible
- E Inexperienced



31 Unscramble the letters and identify which one of these words is not an animal:

- A usemo

5
E
2
D
2
D
N

31 Unscramble the letters and identify which one of these words is not an animal:

A usemo

Mouse

B sobin

Bison

C gerit

Tiger

D

D eetsawr

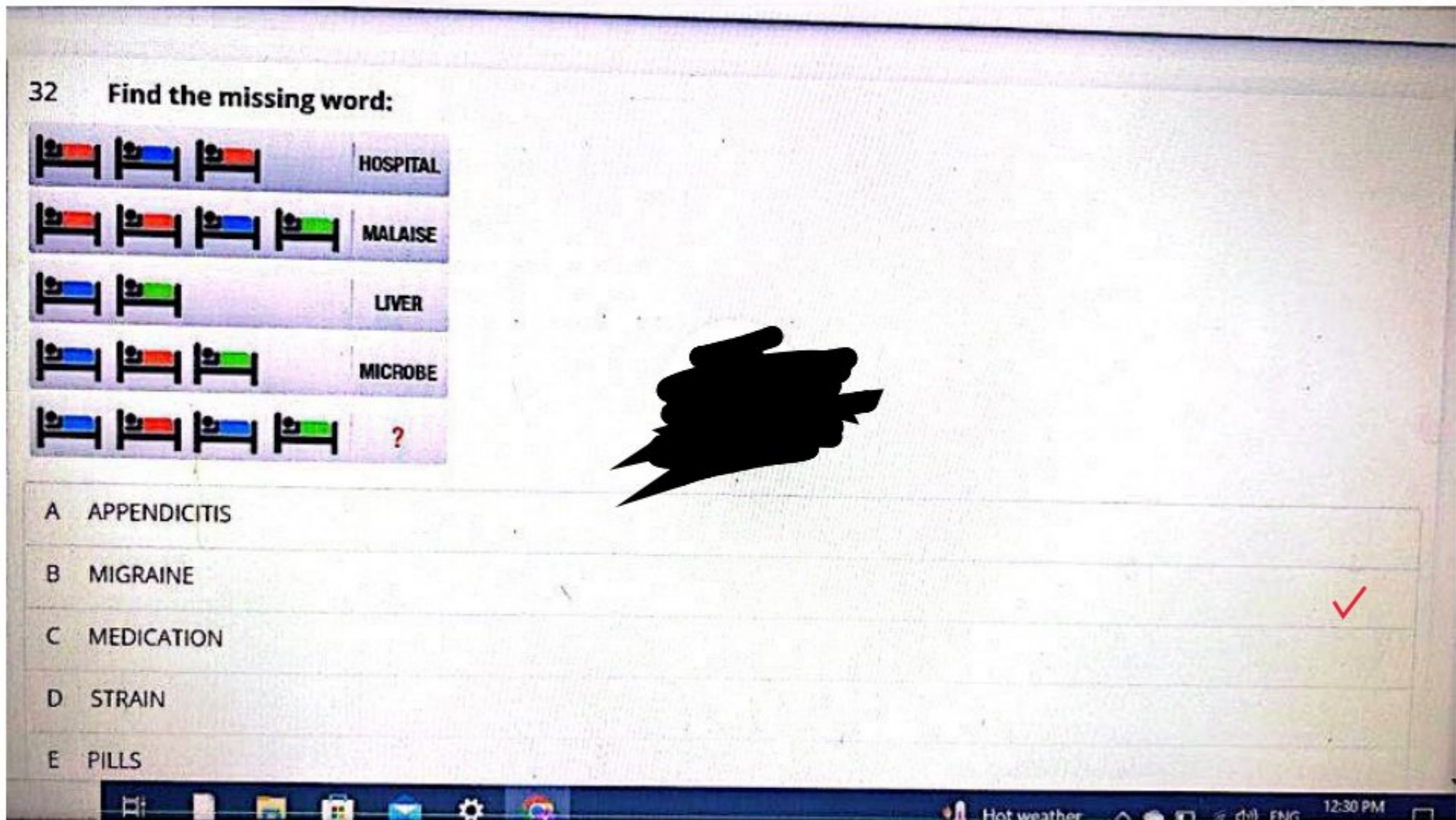
E fafireg

Giraffe

32 Find the missing word:



HOSPITAL



Red:
A&O
Bleu: I
Green E

33 Complete the following series:

3 - 3 - 6 - 18 - 72 - ? - 2160

A 360

B 402

C 518

D 602

E 802

A

34 Mary smokes 20 cigarettes a day. She decides to reduce her consumption daily by one cigarette. One Sunday, she smokes one cigarette extra rather than smoking one cigarette less. How many cigarettes does she smoke in a week?

$$3 * 1 = 3$$

$$3 * 2 = 6$$

$$6 * 3 = 18$$

$$18 * 4 = 72$$

$$72 * 5 = 360$$

34 Mary smokes 20 cigarettes a day. She decides to reduce her consumption daily by one cigarette. However, one Sunday, she smokes one cigarette extra rather than smoking one cigarette less. How many days will it take her to completely stop smoking?

- A 20 days
- B 21 days
- C 22 days
- D 23 days
- E 24 days

B

INSTRUCTION:

Study these 4 additions carefully and answer questions 35 and 36.

$1 + 1 = 2$
 $2 + 2 = 4$
 $3 + 3 = 6$
 $4 + 4 = 10$


Study these 4 additions carefully and answer questions 35 and 36:

$$\text{cloud} + \text{moon} + \text{sun} + \text{moon} = 19$$

$$\text{sun} + \text{thunder} + \text{thunder} + \text{sun} = 16$$

$$\text{thunder} + \text{sun} + \text{moon} + \text{sun} = 20$$

$$\text{sun} + \text{sun} + \text{thunder} + \text{sun} = 22$$

35 What is the value of the sun  ?

- A 4
- B 5
- C 6

$$2A + 2B = 16 \text{ (equation 2)}$$

$$3A + B = 22 \text{ (equation 4)}$$

Where $A = \text{sun}$ & $B = \text{thunder}$

Therefore, $A = 7$

36

What is the value of the cloud  ?


A 1

B 2

C 3

D 4





Denis is back in Paris, his home town. To celebrate his homecoming, he is throwing a party with some friends. Karlos,

from Mexico, is invited. Annabelle from Canada is also invited. Rita, from Tunisia, will also attend. Only Betty won't be there, since she had to move back home to (x) :

- A Guatemala
- B Pakistan
- C United-States ✓
- D Philippines
- E Denmark
- F Morocco

letters similarity

Study the following statements carefully and answer questions 38 and 39:

There are a total of 3 vehicles in 3 different colors and each person owns only one vehicle.

- Michael does not own a motorbike
- Stephen does not own the red vehicle
- The car is green
- Giles has a bicycle
- One of the vehicles is blue

38 Which is Michael's vehicle?

A	The motorbike.	Giles.	Stephen.	Michael
B	The car. ✓	bicycle.	motorbike.	car
C	The bicycle.	red.	blue.	green

39 What is the color of Giles' vehicle?

A Red




B Green

C Blue

D It is impossible to say





Every 4 letters are together,
depending on the alphabet order.

K M L J [J K L M]
E C F D [C D E F]
S P ? Q [Q R S T]
Therefore, ?=R

41 Complete the following series:

O, 12, U, 15, A, 18, E, 21, ?

A F

B G

C M

D I

E V

D

42 Which of the following sentences...

42) Which of the following sentences best explains the saying "to be the black sheep?"

A Playing the fool.

B To be the "odd one out".



C To be a bird of ill omen.

D Being the one that finishes what he or she started.

E Becoming the focal point.